

# Place Value up to 1000

Count the groups of blocks and write the total.



	<p>9 hundreds + 1 ten + 8 ones</p> <p>_____ + _____ + _____ = _____</p>
	<p>6 hundreds + 5 tens + 3 ones</p> <p>_____ + _____ + _____ = _____</p>
	<p>2 hundreds + 9 tens + 6 ones</p> <p>_____ + _____ + _____ = _____</p>
	<p>3 hundreds + 8 tens + 9 ones</p> <p>_____ + _____ + _____ = _____</p>
	<p>9 hundreds + 5 tens + 9 ones</p> <p>_____ + _____ + _____ = _____</p>
	<p>8 hundreds + 6 tens + 4 ones</p> <p>_____ + _____ + _____ = _____</p>
	<p>8 hundreds + 0 tens + 2 ones</p> <p>_____ + _____ + _____ = _____</p>
	<p>9 hundreds + 2 tens + 5 ones</p> <p>_____ + _____ + _____ = _____</p>

# Place Value up to 1000 Answers

	<p>9 hundreds + 1 ten + 8 ones</p> $900 + 10 + 8 = 918$
	<p>6 hundreds + 5 tens + 3 ones</p> $600 + 50 + 3 = 653$
	<p>2 hundreds + 9 tens + 6 ones</p> $200 + 90 + 6 = 296$
	<p>3 hundreds + 8 tens + 9 ones</p> $300 + 80 + 9 = 389$
	<p>9 hundreds + 5 tens + 9 ones</p> $900 + 50 + 9 = 959$
	<p>8 hundreds + 6 tens + 4 ones</p> $800 + 60 + 4 = 864$
	<p>8 hundreds + 0 tens + 2 ones</p> $800 + 0 + 2 = 802$
	<p>9 hundreds + 2 tens + 5 ones</p> $900 + 20 + 5 = 925$

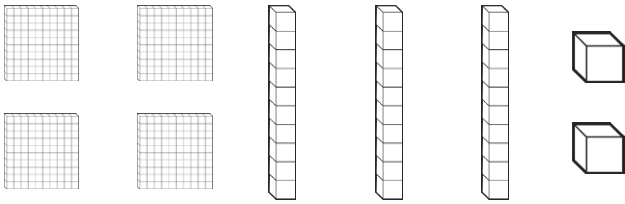
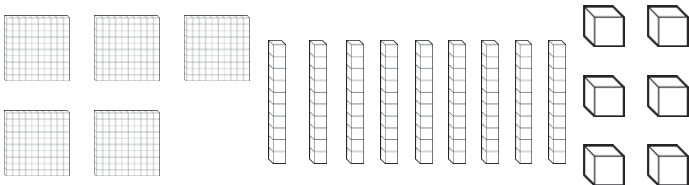
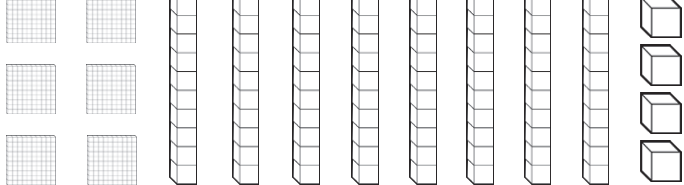
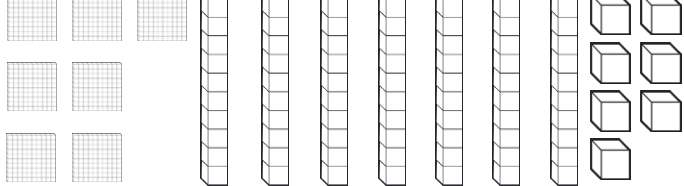
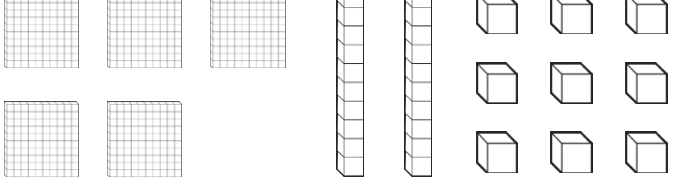
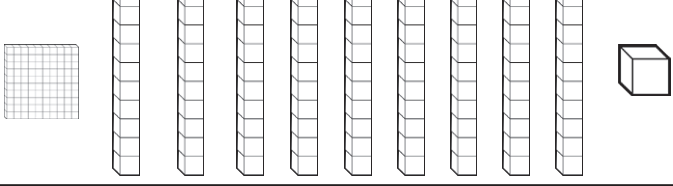
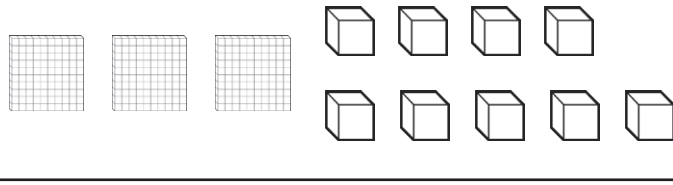

# Place Value up to 1000

Count the groups of blocks and write the total.



	<p>_____ hundreds + _____ tens + _____ ones</p> <p>_____ + _____ + _____ = _____</p>
	<p>_____ hundreds + _____ tens + _____ ones</p> <p>_____ + _____ + _____ = _____</p>
	<p>_____ hundreds + _____ tens + _____ ones</p> <p>_____ + _____ + _____ = _____</p>
	<p>_____ hundreds + _____ tens + _____ ones</p> <p>_____ + _____ + _____ = _____</p>
	<p>_____ hundreds + _____ tens + _____ ones</p> <p>_____ + _____ + _____ = _____</p>
	<p>_____ hundred + _____ tens + _____ one</p> <p>_____ + _____ + _____ = _____</p>
	<p>_____ hundreds + _____ tens + _____ ones</p> <p>_____ + _____ + _____ = _____</p>
	<p>_____ hundreds + _____ tens + _____ ones</p> <p>_____ + _____ + _____ = _____</p>

# Place Value up to 1000 Answers

	<p>4 hundreds + 3 tens + 2 ones</p> $400 + 30 + 2 = 432$
	<p>5 hundreds + 9 tens + 6 ones</p> $500 + 90 + 6 = 596$
	<p>6 hundreds + 8 tens + 4 ones</p> $600 + 80 + 4 = 684$
	<p>7 hundreds + 7 tens + 7 ones</p> $700 + 70 + 7 = 777$
	<p>5 hundreds + 2 tens + 9 ones</p> $500 + 20 + 9 = 529$
	<p>1 hundred + 9 tens + 1 one</p> $100 + 90 + 1 = 191$
	<p>3 hundreds + 0 tens + 9 ones</p> $300 + 0 + 9 = 309$
	<p>9 hundreds + 2 tens + 5 ones</p> $900 + 20 + 5 = 925$

# Place Value up to 1000

Complete the pictorial representations and the number sentences.



	<p>_____ + 4 tens + _____</p> <p>_____ + _____ + 5 = _____</p>
	<p>6 hundreds + _____ + _____</p> <p>_____ + _____ + 2 = _____</p>
	<p>_____ + _____ + 9 ones</p> <p>_____ + 70 + _____ = _____</p>
	<p>_____ + 0 tens + _____</p> <p>500 + _____ + _____ = _____</p>
	<p>_____ + _____ + 0 ones</p> <p>800 + _____ + _____ = _____</p>
	<p>_____ + _____ + 9 ones</p> <p>_____ + 30 + _____ = _____</p>
	<p>_____ + 0 tens + _____</p> <p>_____ + _____ + 8 = _____</p>
	<p>7 hundreds + _____ + _____</p> <p>_____ + _____ + 0 = _____</p>

# Place Value up to 1000 Answers

	<p><b>7 hundreds + 4 tens + 5 ones</b></p> $700 + 40 + 5 = 745$
	<p><b>6 hundreds + 9 tens + 2 ones</b></p> $600 + 90 + 2 = 692$
	<p><b>2 hundreds + 7 tens + 9 ones</b></p> $200 + 70 + 9 = 279$
	<p><b>5 hundreds + 0 tens + 8 ones</b></p> $500 + 0 + 8 = 508$
	<p><b>8 hundreds + 7 tens + 0 ones</b></p> $800 + 70 + 0 = 870$
	<p><b>2 hundreds + 3 tens + 9 ones</b></p> $200 + 30 + 9 = 239$
	<p><b>8 hundreds + 0 tens + 8 ones</b></p> $800 + 0 + 8 = 808$
	<p><b>7 hundreds + 9 tens + 0 ones</b></p> $700 + 90 + 0 = 790$